







# Mini Beast Maths

Each mini beast equals a number.

Using the key to show you which mini beast equals which number, have a go at the following sums.

 = 1	 = 2	 = 3	 = 4	 = 5	 = 6
---	---	---	---	---	---

$$\text{Bee} + 3 = \square$$

$$\text{Moth} + 2 = \square$$

$$\text{Ladybug} + 5 = \square$$

$$\text{Moth} + 7 = \square$$

$$\text{Wasp} + 9 = \square$$

$$\text{Snake} + \text{Snake} = \square$$

$$\text{Caterpillar} + \text{Moth} = \square$$

$$\text{Caterpillar} - 5 = \square$$

$$\text{Snake} - 3 = \square$$

$$\text{Bee} - 1 = \square$$

$$\text{Ladybug} - 2 = \square$$

$$\text{Bee} - 3 = \square$$

$$\text{Caterpillar} - \text{Wasp} = \square$$

$$\text{Bee} - \text{Ladybug} = \square$$